

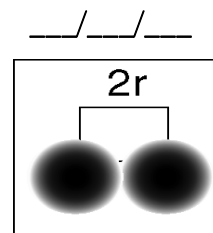
Name _____

Honors Chemistry

Periodic Trends

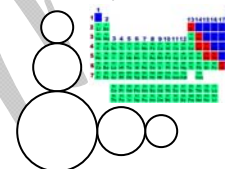
The periodic table is designed such that a great deal of information can be deduced by where elements are positioned. We will look at four trends today that will lay important ground work for the next few chapters.

- **ATOMIC RADIUS** is defined as half the distance between the nuclei of two like atoms located next to one another. We must measure the radius in this way, as it is difficult to pinpoint the outer energy level of an atom. But, since we can locate the nuclei of the two atoms, dividing this distance in half gives us the radius of one of the atoms.



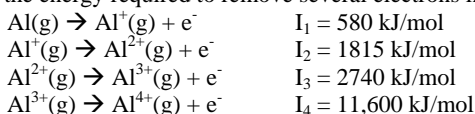
LEFT TO RIGHT ACROSS A PERIOD, ATOMIC RADIUS DECREASES. This occurs because as we go across, we not only increase the number of protons, but we also increase the number of electrons. And, since no energy levels are added, the increased number of protons and electrons creates a **greater attraction** between the two and thus pull them closer to one another.

ATOMIC RADIUS INCREASES AS YOU GO DOWN A GROUP. This is because energy levels are added and the distance between the nucleus and the outer electrons is greater. Also, the added inner electrons reduce the attraction between the outer electrons and the nucleus. This reduction in the attraction between a nucleus and its outer electrons due to the blocking effect of inner(core) electrons is referred to as the **shielding effect**.



- **IONIZATION ENERGY** is defined as the amount of energy needed to remove an electron from an atom or ion in its ground state in the gas phase.

Consider the energy required to remove several electrons in succession from aluminum in the gaseous state:



In a stepwise ionization process, it is always the highest-energy electron (the one bound least tightly) that is removed first. The first ionization energy, I_1 , is the energy required to remove the highest-energy electron of an atom. Note that as more electrons are removed, the successive ionization energies increase. This is because as the atoms lose an electron they become positively charged. This increase in positive charge binds the remaining electrons more firmly. **The big increase in aluminum's ionization energy between I_3 and I_4 is because in the fourth step a core electron is being removed. Core electrons are bound more tightly than valence electrons.**

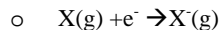
LEFT TO RIGHT ACROSS A PERIOD, FIRST IONIZATION ENERGY INCREASES. Increasing the number of protons and electrons in the same principle energy level increases the attraction between the protons and the electrons, making it more difficult to remove an electron.

FIRST IONIZATION ENERGY DECREASES AS YOU GO DOWN A GROUP,. Because atoms gain energy levels of electrons as we move down a group, and inner electrons cause a **shielding effect**, it is easier to remove an electron from an atom with seven energy levels than it would be to remove an electron from an atom with only 2 energy levels.

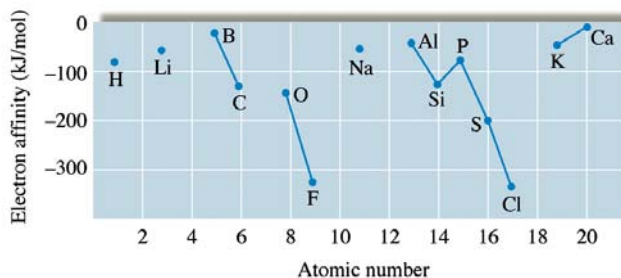
The diagram to the right shows the trends in ionization energies (kJ/mol) for the representative elements. Note the discontinuities in ionization energy in going across a period. **In period two, discontinuities exist between beryllium and boron and nitrogen and oxygen.** The decrease in ionization energy going from Be to B is due to the fact that **the s subshell electrons shield the nucleus from the p subshell electron in boron** making its first ionization energy lower. The reason for the decrease in ionization energy when going from nitrogen to oxygen is due to **the fact that oxygen has one doubly filled orbital. The extra electron repulsions make its first ionization energy lower.**

	1A	2A	3A	4A	5A	6A	7A	8A
1	H 1311							He 2377
2	Li 520	Be 899	B 800	C 1086	N 1402	O 1314	F 1681	Ne 2088
3	Na 495	Mg 735	Al 580	Si 780	P 1060	S 1005	Cl 1255	Ar 1527
4	K 419	Ca 590	Ga 579	Ge 761	As 947	Se 941	Br 1143	Kr 1356
5	Rb 409	Sr 549	In 558	Sn 708	Sb 834	Te 869	I 1009	Xe 1176
6	Cs 382	Ba 503	Tl 589	Pb 715	Bi 703	Po 813	At (926)	Rn 1042

- **ELECTRON AFFINITY** is the energy change associated with the addition of an electron to a gaseous atom.



The figure to the right shows the electron affinity values for the atoms among the first 20 elements that form stable, isolated negative ions. When the addition of an electron makes the atom more stable, energy is given off. This is true for most of the elements. When the addition of an electron makes the atom less stable, energy must be put in. That's because the added electron must be placed in a higher energy level, making the element less stable. This is the case for elements with full subshells, like the alkaline earth metals and the noble gases.



LEFT TO RIGHT ACROSS A PERIOD, THE ENERGY GIVEN OFF WHEN AN ELECTRON IS ADDED INCREASES.

ELECTRON AFFINITIES DO NOT CHANGE MUCH DOWN A GROUP.

The most reactive metals have the smallest ionization energy (Fr). The most reactive non-metals have the largest ionization energy and are the most exothermic when they gain electrons (F).

- **ELECTRONEGATIVITY** is defined as the tendency for an atom to attract electrons to itself when it is bonded to another atom.

LEFT TO RIGHT ACROSS A PERIOD, ELECTRONEGATIVITY INCREASES. One important note about **electronegativity** is that it **does not apply to the noble gases.** This is because the noble gas elements do not readily form compounds.

ELECTRONEGATIVITY DECREASES AS YOU MOVE DOWN A GROUP. This is again due to the shielding effect of the inner (core) electrons.

At the completion of this assignment you will be prepared to take the following Chapter 3 on-line quizzes:

• alkali metals trends quiz	• alkaline earth metals trends quiz	• atomic radius trends quiz
• chalcogen trends quiz	• electronegativity high low quiz	• electronegativity trends quiz
• halogen trends quiz	• increase decrease trends quiz	• ionization energy trends quiz
• largest smallest atomic radius quiz	• metalloid trends quiz	• mixed trends quiz 1
• mixed trends quiz 2	• period 2 trends quiz	• period 3 trends quiz
• period 4 trends quiz	• period 5 trends quiz	• period 6 trends quiz
• group 13 trend quiz	• group 14 trend quiz	• group 15 trend quiz

Homework: Write the symbol for the element described.

- _____ 1. The largest 5th period metal.
- _____ 2. The second period element with the largest electron affinity.
- _____ 3. The fourth period metalloid with the smallest atomic mass.
- _____ 4. The element with the lowest electronegativity that reacts with air and water and has to be stored in oil.
- _____ 5. The nonmetal with an oxidation number of (2-) that has the greatest atomic mass.
- _____ 6. The element with 2 protons less than the most electronegative element.
- _____ 7. The least reactive third period element.
- _____ 8. The element with more protons than Sulfur that has the lowest ionization energy.
- _____ 9. The third period element with the largest electron affinity.
- _____ 10. The synthetic element with the smallest atomic number.
- _____ 11. The transition element with the smallest atomic radius.
- _____ 12. The largest 4th period non-metal.
- _____ 13. The third period metalloid with the largest atomic mass.
- _____ 14. The element with the highest electronegativity that reacts with air and water and has to be stored in oil.

- _____ 15. The nonmetal with an oxidation number of (1-) that has the smallest atomic mass.
- _____ 16. The element with 12 protons more than the most electronegative element.
- _____ 17. The fifth period element with the electron configuration ending in p^3 .
- _____ 18. The element with the electron configuration $5d^6$.
- _____ 19. A non-reactive element with the highest ionization energy that also has a higher atomic mass than Argon.
- _____ 20. The element with 13 more protons than the least electronegative second period element.
- _____ 21. The largest 4th period metal.
- _____ 22. The Group 13 element that is smaller than Indium and the least electronegative.
- _____ 23. The fourth period metalloid with the largest atomic mass.
- _____ 24. The element with 5 protons more than the alkali metal with the lowest electronegativity.
- _____ 25. The nonmetal with an oxidation number of (3-) that has the greatest atomic mass.
- _____ 26. The element with 2 protons more than the most electronegative element.
- _____ 27. The element with the electron configuration $3d^3$.
- _____ 28. The least electronegative third period element.
- _____ 29. The element with more protons than Sulfur that has the highest ionization energy.
- _____ 30. The Group 14 metal that has the highest ionization energy.
- _____ 31. Your favorite element. ☺
- _____ 32. The transition element with the smallest atomic mass.
- _____ 33. The third period element with the electron configuration ending in p^3 .
- _____ 34. The element with the electron configuration $4d^6$.
- _____ 35. An element with 73 protons.
- _____ 36. The element with 7 more protons than the least electronegative third period element.
- _____ 37. The smallest of the Group 12 elements.
- _____ 38. The smallest of the alkaline-earth metals.
- _____ 39. What do you do with dead people?
- _____ 40. The heaviest metalloid
- _____ 41. An alkali in the fourth period.
- _____ 42. A transition element whose d orbital configuration is $3d^6$.
- _____ 43. The halogen in the fourth period.
- _____ 44. Noble gas element whose atoms are the heaviest.
- _____ 45. Atom whose electron configuration ends in $4p^1$.
- _____ 46. A second period element with a 2- oxidation number.
- _____ 47. An element with the largest atoms in the first period.
- _____ 48. A third period inert gas.
- _____ 49. Smallest atom of all the elements.
- _____ 50. Lightest atom of all the elements.
- _____ 51. Sixth period element whose configuration ends with p^6 .
- _____ 52. The second period element with the lowest electronegativity.
- _____ 53. The fifth period element with the highest ionization energy.
- _____ 54. The element with the lowest electronegativity.
- _____ 55. The chalcogen metal with the lowest ionization energy.

56. What is atomic radius?
57. What is the shielding effect?
58. What is ionization energy?
59. What is electron affinity?
60. What is electronegativity?
61. When writing the periodic trend for electronegativity, why aren't the noble gases included?

For each of the following statements, determine which term it best describes. Use: **metal, metalloid or nonmetal.**

62. _____ These elements are brittle or gases.
63. _____ These elements generally form cations.
64. _____ This group of elements contains solids, liquids & gases at room temperature.
65. _____ All d block and f block elements belong to this group.
66. _____ These elements are malleable and ductile.
67. _____ These elements generally gain electrons when they form ions.
68. _____ These elements have high melting points.
69. _____ These elements are good conductors of heat and electricity.
70. _____ These elements have a shiny metallic appearance.
71. _____ These elements have properties of metals and nonmetals.
72. _____ These elements are used as semiconductors.
73. _____ These elements are poor conductors of heat & electricity.
74. _____ These elements have high densities.
75. _____ These elements have high ionization energies.

Free Response: Briefly (in one to three sentences) explain each of the following in terms of atomic structure.

- (a) In general, there is an increase in the first ionization energy from Li to Ne.
- (b) The first ionization energy of B is lower than that of Be.
- (c) The first ionization energy of O is lower than that of N.
- (d) The electron affinities of beryllium and nitrogen are close to zero but the other elements in the period have much higher values.